

THE SKIPPING NINJA



NINJA SHAPES

Want to be a ninja of Shapes?! Answer the shape questions below...

1. What shape is the Skipping Ninja's skipping rope? Tick your choice of shape below





Circle

Square

Triangle

Star



2. How many degrees are in a circle?




=

3. How many degrees are in a half circle?

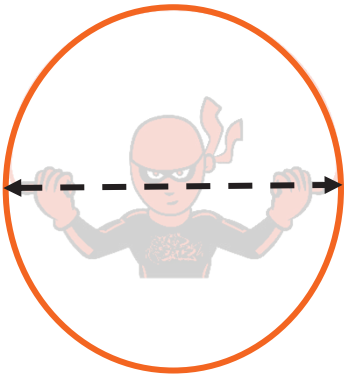


=

4. If the ninja jumps and turns the skipping rope 2 times, how many degree's does the rope turn?

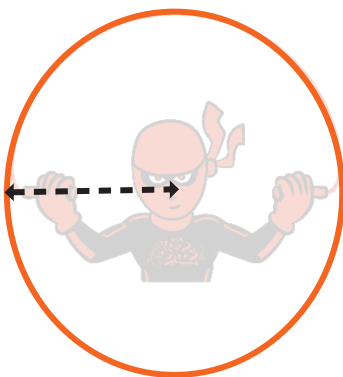


5. What is the name of the measurement shown by the dotted arrow on a circle called?



Circumference	<input type="checkbox"/>
Diameter	<input type="checkbox"/>
Radius	<input type="checkbox"/>

5. What is the name of the measurement shown by the dotted arrow on a circle called?



Circumference	<input type="checkbox"/>
Diameter	<input type="checkbox"/>
Radius	<input type="checkbox"/>